

Name : _____

Score : _____

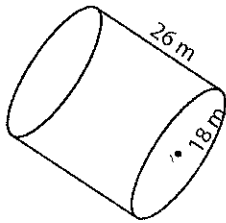
Answer key

Surface Area - Cylinder

MS2

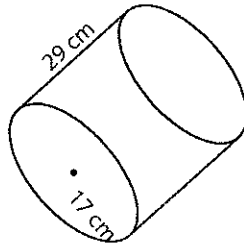
Find the surface area of each cylinder. Round the answer to nearest tenth. (use $\pi = 3.14$)

1)



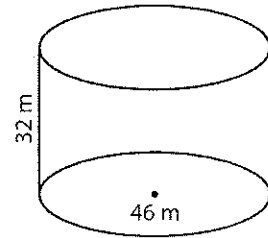
Surface Area = 4973.8 m²

2)



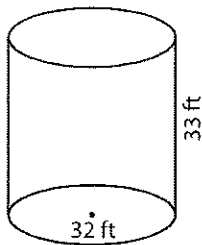
Surface Area = 4911 cm²

3)



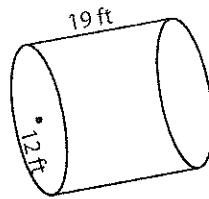
Surface Area = 7944.2 m²

4)



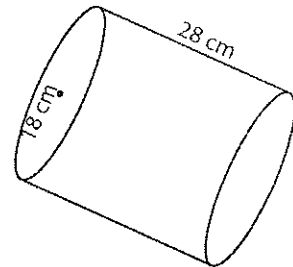
Surface Area = 4923.5 ft²

5)



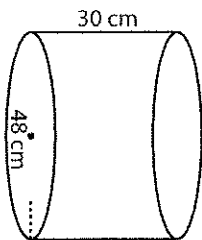
Surface Area = 2336.2 ft²

6)



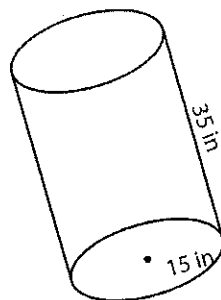
Surface Area = 5199.8 cm²

7)



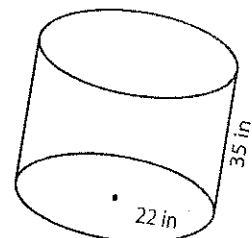
Surface Area = 8138.9 cm²

8)



Surface Area = 4710 in²

9)



Surface Area = 7875.1 in²