

Name : _____

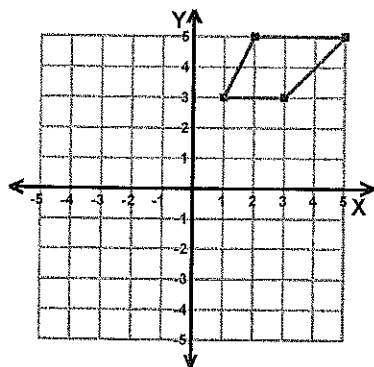
Score : _____

Teacher : _____

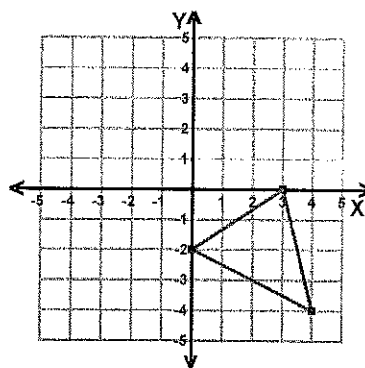
Date : _____

Reflections

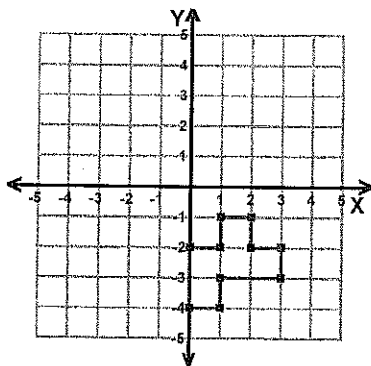
1) Reflection: Across the y-axis



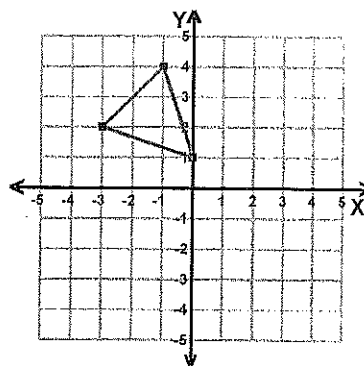
2) Reflection: Across the line $x = 1$



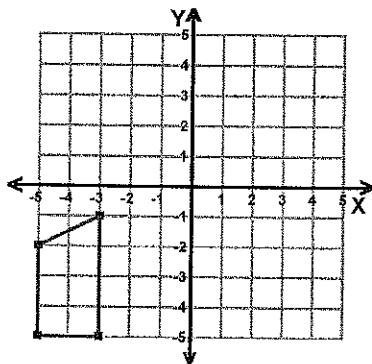
3) Reflection: Across the line $y = -2$



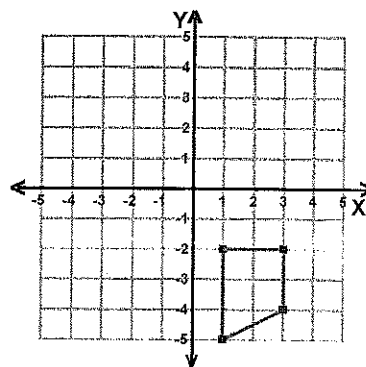
4) Reflection: Across Line $y = x$



5) Reflection: Across Line $y = -x$



6) Reflection: Across the x-axis



Name : _____

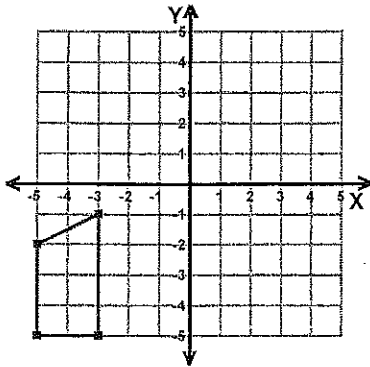
Score : _____

Teacher : _____

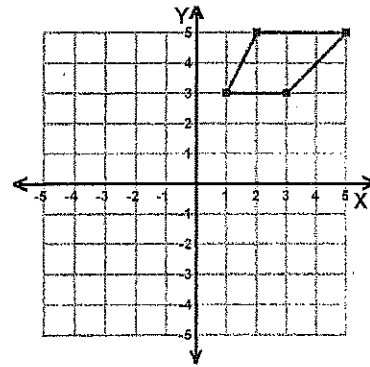
Date : _____

Reflections

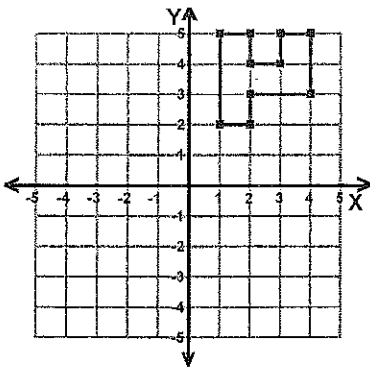
1) Reflection: Across the y-axis



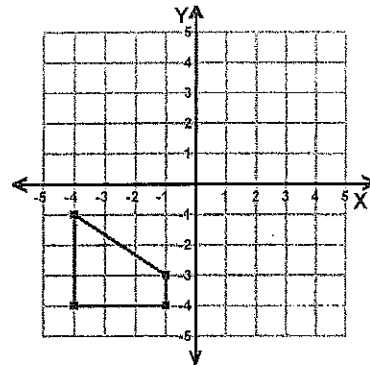
2) Reflection: Across the x-axis



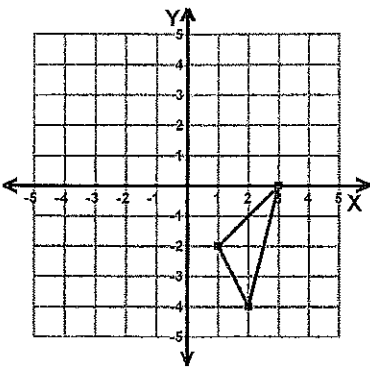
3) Reflection: Across the line $x = 1$



4) Reflection: Across the line $y = -1$



5) Reflection: Across Line $y = x$



6) Reflection: Across Line $y = -x$

