

Name: \_\_\_\_\_

Score: \_\_\_\_\_

# Lines of Symmetry

Sheet 1


Draw lines of symmetry on each shape. Count and write the lines of symmetry you see.

1)



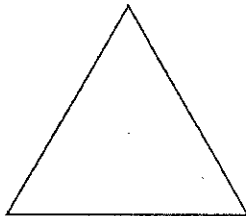
\_\_\_\_\_

2)




\_\_\_\_\_

3)




\_\_\_\_\_

4)



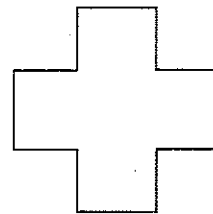
\_\_\_\_\_

5)




\_\_\_\_\_

6)



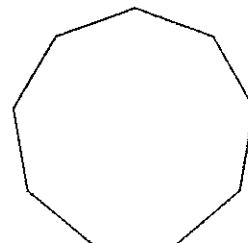
\_\_\_\_\_

7)



\_\_\_\_\_

8)



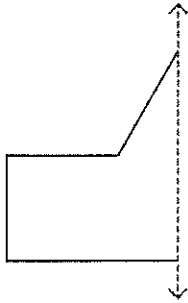
\_\_\_\_\_

# Mirror Image

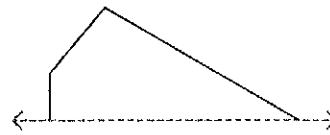
Sheet 1

Draw the other half of each symmetrical shape.

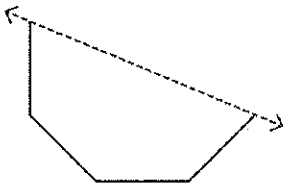
1)



2)



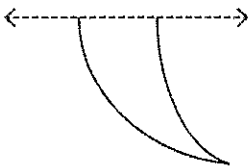
3)



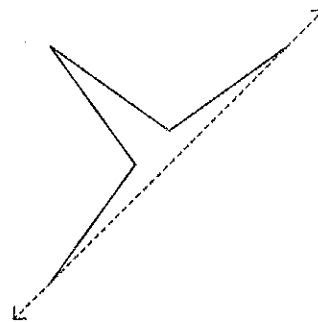
4)



5)



6)



7)



8)

